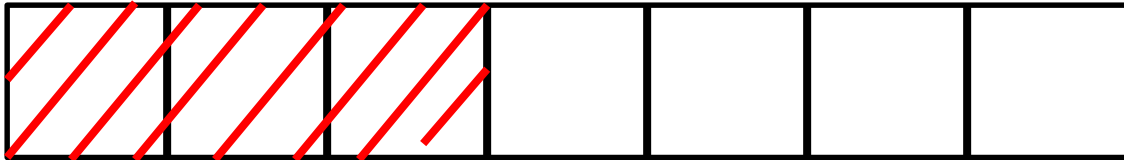
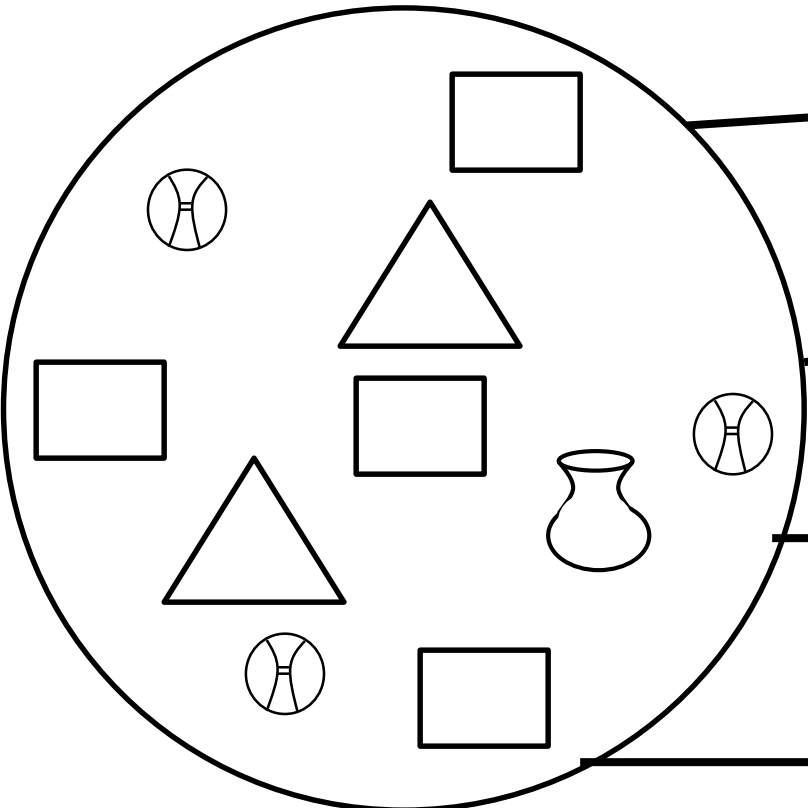


1 Name the unshaded fraction. 2mrks



2 Form smaller sets from the given set below. 2mrks



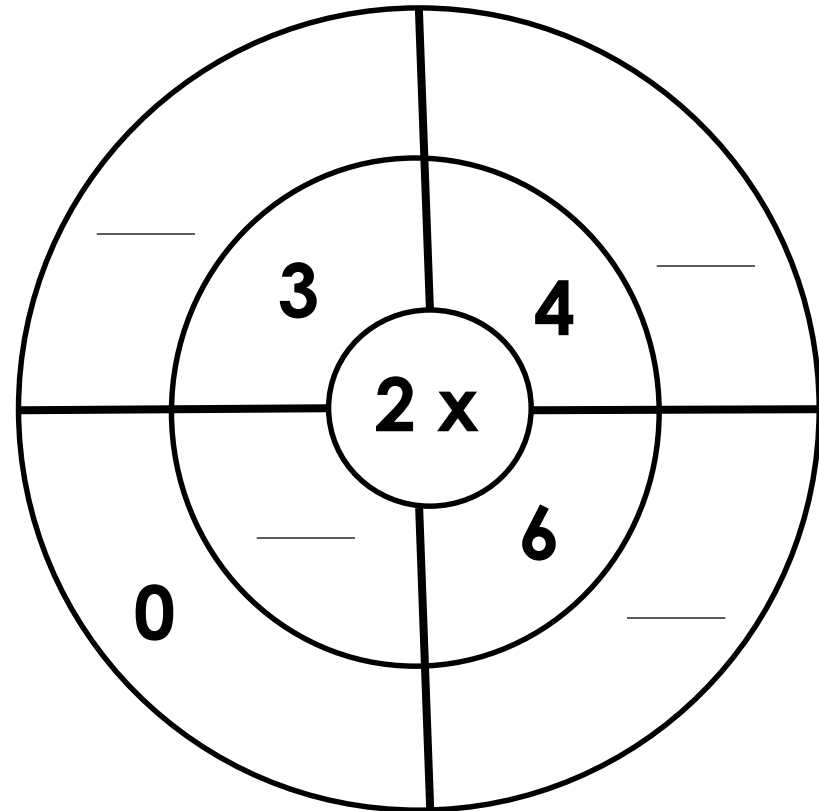
Four empty rectangular boxes are arranged vertically on the right side of the page. Lines connect the top box to a square in the circle, the second box to a triangle, the third box to a circle with a vertical line, and the fourth box to another square in the circle.

3 a) Draw **3** tens. 2mrks@

b) Write the place value of **4** in **467**.

c) What number has been expanded:
 $900 + 30 + 8$

4 Complete correctly.
1mrk@



5 (I) Add: $46 + 19 =$

5 (II) Kato had **678** litres of milk on Sunday. He collected **94** litres of milk on Monday. How many litres did he have altogether? 2mrks@

6 Draw the shapes below. 2mrks@

| oval | rectangle | triangle |
|------|-----------|----------|
| | | |