

Tuesday , 30th March , 2021.

Revision exercise

Revision exercise

1. Divide **12** by **3**

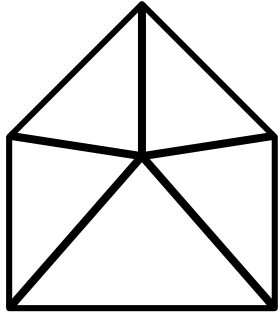
2. Draw a set symbol for an empty set in the space below.

3. Find the place value of **4** in **402**.

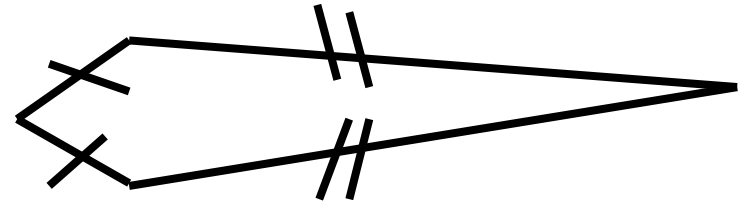
4. What is the next number in the sequence below.

10, 20, 30, 40, —

5. Shade $\frac{2}{5}$ of the figure below.




6. Name the figure below



7. If one cow has **4** legs, how many legs do **3** cows have?

8. Show a half past **4** on the clock face below.



9. Tumusiime had sh.**10000** and bought a skirt at sh.**4000**. Calculate her change

10 Jaguru is **90**cm tall. Eon is **60**cm tall. Who is taller?

11 Simplify:
2 apples + **3** apples

12 Name the set below.

